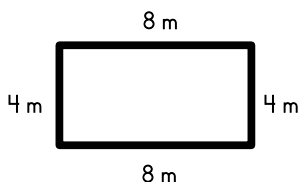


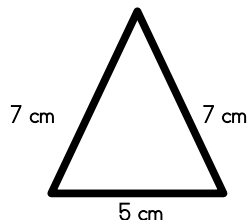
Name: _____

Perimeter

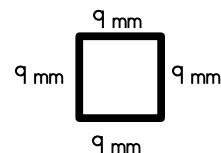
Find the perimeter of each polygon.



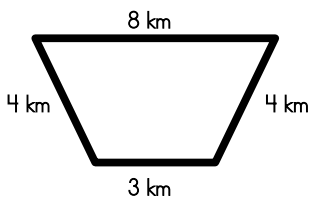
Perimeter = _____



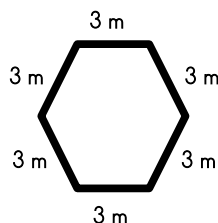
Perimeter = _____



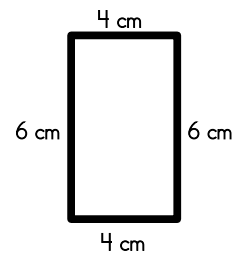
Perimeter = _____



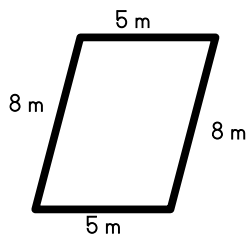
Perimeter = _____



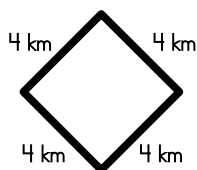
Perimeter = _____



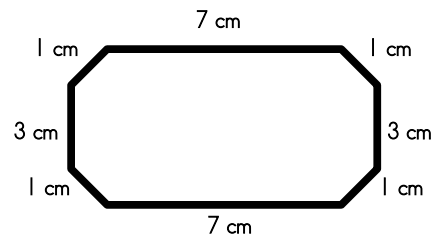
Perimeter = _____



Perimeter = _____



Perimeter = _____



Perimeter = _____

Bonus Box

Write the names of the polygons pictured above.