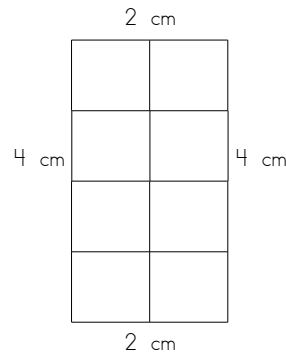


Name: _____

Area & Perimeter

Perimeter is the distance around a shape.
To find the perimeter, add the length of each side.

Area is the number of square units that can fit inside of a shape.
To find the area, count the square units.

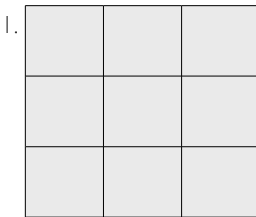


$$\text{Perimeter} = 12 \text{ cm}$$

$$\text{Area} = 8 \text{ cm}^2$$


Directions: First, label the length of sides of each polygon.
Then, add to find the perimeter.
After that, count the squares to find the area.

Be sure you write cm next to each answer for perimeter and cm² next to each answer for area.



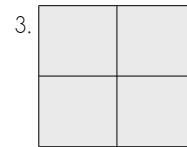
$$P = \underline{\hspace{2cm}}$$

$$A = \underline{\hspace{2cm}}$$




$$P = \underline{\hspace{2cm}}$$

$$A = \underline{\hspace{2cm}}$$



$$P = \underline{\hspace{2cm}}$$

$$A = \underline{\hspace{2cm}}$$



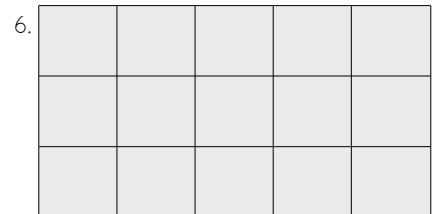
$$P = \underline{\hspace{2cm}}$$

$$A = \underline{\hspace{2cm}}$$



$$P = \underline{\hspace{2cm}}$$

$$A = \underline{\hspace{2cm}}$$



$$P = \underline{\hspace{2cm}}$$

$$A = \underline{\hspace{2cm}}$$