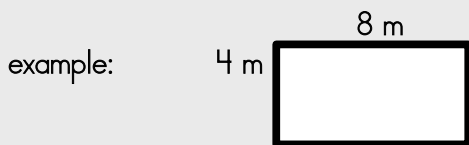


Name: _____

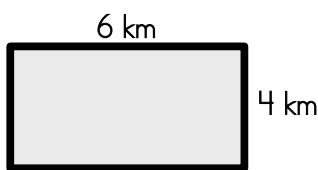
Area of a Rectangle

To find the area of a rectangle, multiply the length by the width.

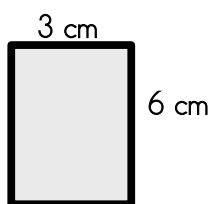


$$\text{area} = 4 \text{ m} \times 8 \text{ m} = \underline{32 \text{ square meters}}$$

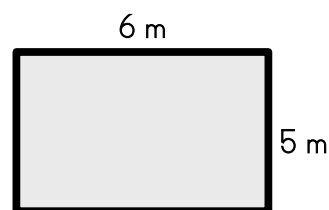
Find the area of each rectangle by multiplying.



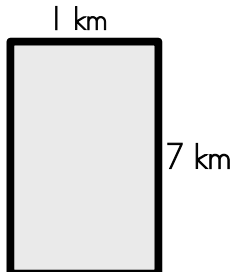
area = _____



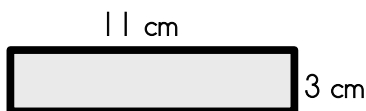
area = _____



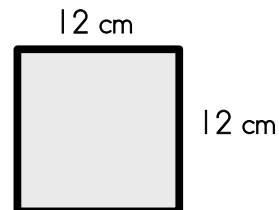
area = _____



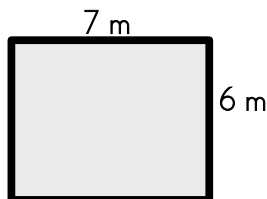
area = _____



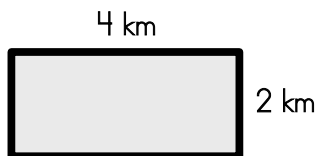
area = _____



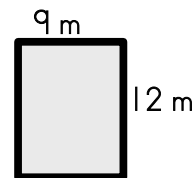
area = _____



area = _____



area = _____



area = _____